

Year 1 Autumn 2 Maths Activity Mat 6

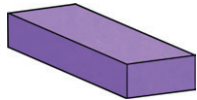
Section 1

Match the name to the shape.

cuboid



sphere




Section 2

I have 6p.

Draw coins that add up to 6p.

Section 3



Group the balls in 2s. How many groups have you got?

Section 4

$$6 + \square = 8$$

$$9 + \square = 10$$

Section 5

Two teddies have 2 ears each.

How many ears are there altogether?



Section 6

How many spots are there altogether?



Section 7


Kamil has 5 balloons.

He pops 1 balloon. How many does he have left?



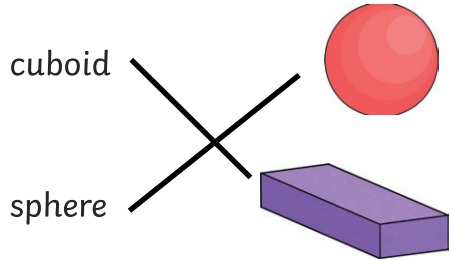
Section 8

Which is taller?



Section 1

Match the name to the shape.




Section 2

I have 6p.

Draw coins that add up to 6p.

Coins drawn that add to 6p.

Section 3



Group the balls in 2s. How many groups have you got?

3 groups

Section 4

$$6 + \boxed{2} = 8$$

$$9 + \boxed{1} = 10$$

Section 5

Two teddies have 2 ears each.

How many ears are there altogether?



4 ears

Section 6

How many spots are there altogether?



7 spots

Section 7

Kamil has 5 balloons.


He pops 1 balloon. How many does he have left?



6 balloons

Section 8

Which is taller?



tree

Year 1 Autumn 2 Maths Activity Mat 6

Section 1

Match the name to the shape.

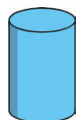
cylinder



sphere



triangular prism




Section 2

I have 12p.

Draw which coins I might have.

Section 3



Group the balls in 2s. How many groups have you got?

Section 4

$$7 + \square = 11$$

$$9 + \square = 15$$

Section 5


Three teddies have 2 ears each.

How many ears are there altogether?



Section 6

How many spots are there altogether?



Section 7

Lisa has 8 balloons.

She pops 2 balloons.

How many does she have left?



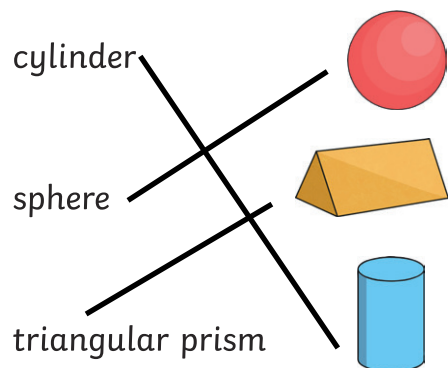
Section 8

Which is taller?



Section 1

Match the name to the shape.




Section 2

I have 12p.

Draw which coins I might have.

Coins drawn that add to 12p.

Section 3



Group the balls in 2s. How many groups have you got?

5 groups

Section 4

$$7 + 4 = 11$$

$$9 + 6 = 15$$

Section 5

Three teddies have 2 ears each.


How many ears are there altogether?



6 ears

Section 6

How many spots are there altogether?



15 spots

Section 7

Lisa has 8 balloons.

She pops 2 balloons.

How many does she have left?



6 balloons

Section 8

Which is taller?



tree

Year 1 Autumn 2 Maths Activity Mat 6

Section 1

Match the name to the shape.

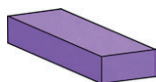
cyboid



sphere



square-based
pyramid



Section 2

Draw the coins that make
16p.

Section 3



Share 10 balls equally
between the bags. How
many balls are there in each
bag?

Section 4

$$13 + \square = 16$$

$$15 + \square = 19$$

Section 5

There are some teddies.

There are 8 ears altogether.


If each teddy has 2 ears,
how many teddies are there
altogether?



Section 6

Draw 4 spots on each half.

How many spots altogether?



Section 7

Draw 9 balloons.

Now imagine you have
popped 3.

How many balloons do you
have left?

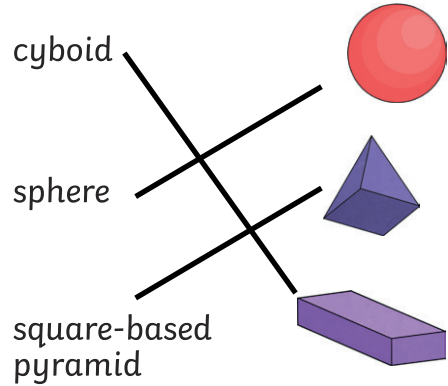
Section 8

Draw something that is
taller than the plant.



Section 1

Match the name to the shape.

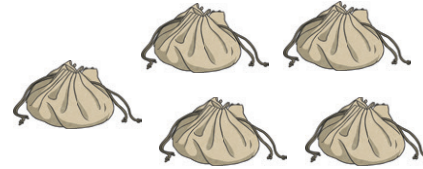


Section 2

Draw the coins that make 16p.

Coins drawn that add to 12p.

Section 3



Share 10 balls equally between the bags. How many balls are there in each bag?

2 balls

Section 4

$$13 + \boxed{3} = 16$$

$$15 + \boxed{4} = 19$$

Section 5

There are some teddies.

There are 8 ears altogether.

If each teddy has 2 ears, how many teddies are there altogether?



4 teddies

Section 6

Draw 4 spots on each half.

How many spots altogether?



8 spots

Section 7

Draw 9 balloons.

9 drawn balloons.

Now imagine you have popped 3.

How many balloons do you have left?

6 balloons

Section 8

Draw something that is taller than the plant.

Something is drawn which is taller than the plant.

