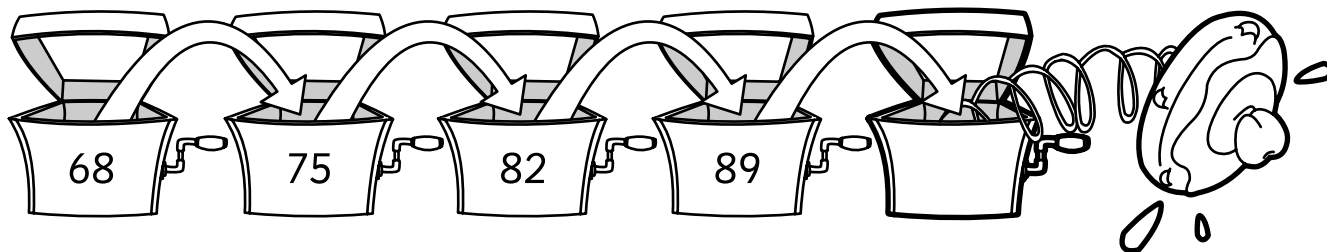




Name: \_\_\_\_\_ Class: \_\_\_\_\_

Granny has made some cakes for Stig, but has decided that he has to answer some questions before he can eat them. Fill in the missing numbers below and work out the number sequence or there's no cake for Stig!

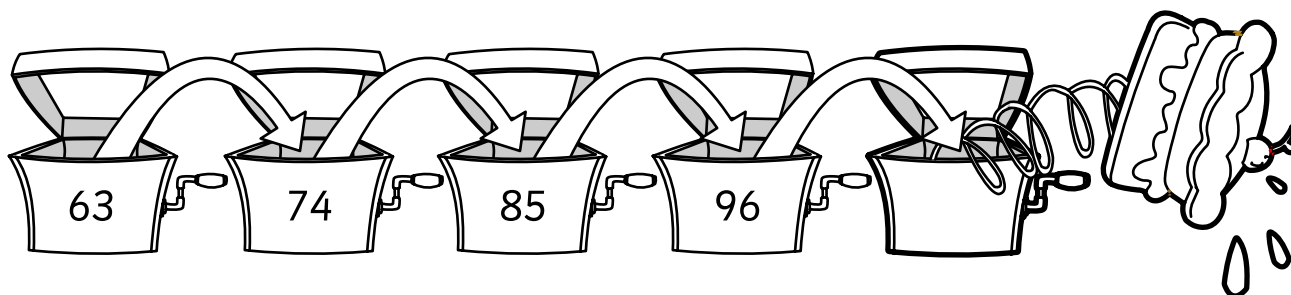
1



What is the number sequence? \_\_\_\_\_

Granny has decided that sequence is too easy for Stig, so here's another one.

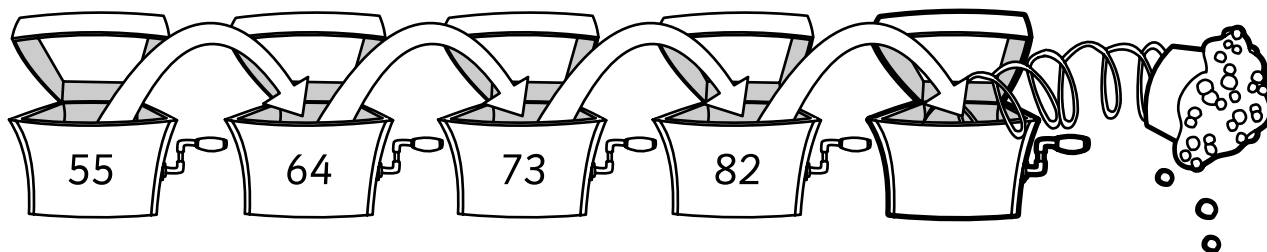
2



What is the number sequence? \_\_\_\_\_

Granny has decided Stig has one last sequence to work out before he gets a plate of gooey cakes.

3




What is the number sequence? \_\_\_\_\_

Now make up your own numbers to go with these number sequences.

The number sequence is add 8

4



The number sequence is add 6

5

