



Name: _____ Class: _____

Use the clues to complete the number sequences. One has been done for you.

1

Clue: + 5

10

15

20

25

30

35

2

Clue: + 10

35

85

3

Clue: + 4

16

36

4

Clue: + 3




18

33







Find the clues to the sequences. One has been done for you.



5 Clue: + 5



6 Clue: _____



7 Clue: _____



8 Clue: _____

